

Ime i prezime:

Datum:

MEHANIKA II

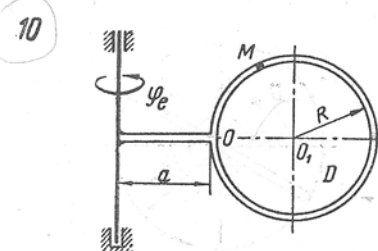
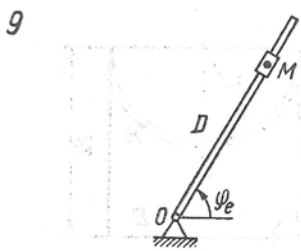
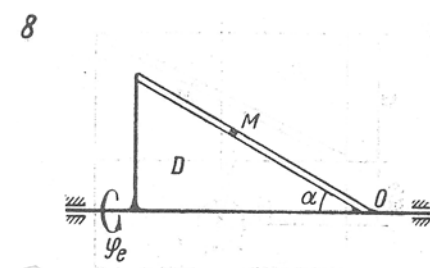
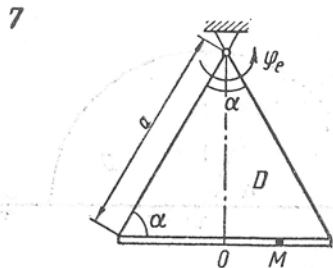
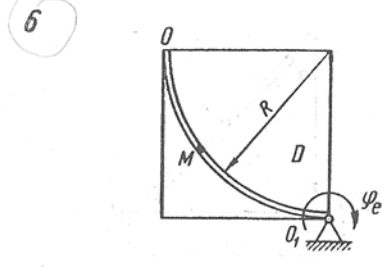
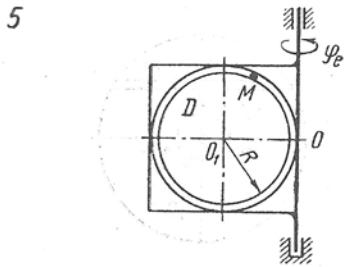
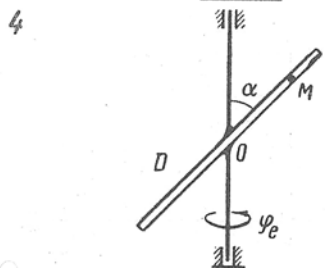
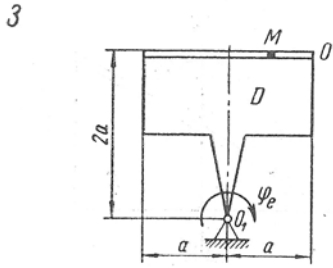
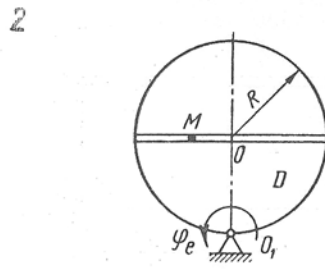
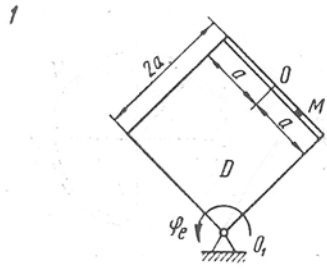
GRAFIČKI RAD BR. 1b

Određivanje apsolutne brzine i apsolutnog ubrzanja tačke za slučaj rotacionog prenosnog kretanja

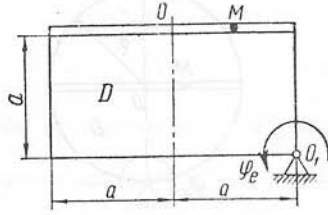
Prema zadatim jednačinama relativnog kretanja tačke M i prenosnog kretanja tijela D odrediti za trenutak $t=t_1$ apsolutnu brzinu i apsolutno ubrzanje tačke M.

Varijanta (sl. K-9, a, b, c)	Jednadžba rotacije tijela D $\varphi_p = f_1(t)$, radijana	Jednadžba relativnog gibanja tačke M $OM = s_r = f_2(t)$ cm	t_1 , s	R, cm	a, cm	α [stup- njeva]
1	$2t^3 - t^2$	$18 \sin \frac{\pi}{4} t$	$\frac{2}{3}$	—	25	—
2	$0,4t^2 + t$	$20 \sin \pi t$	$\frac{5}{3}$	20	—	—
3	$2t + 0,5t^2$	$6t^3$	2	—	30	—
4	$0,6t^2$	$10 \sin \frac{\pi}{6} t$	1	—	—	60
5	$3t - 0,5t^3$	$40\pi \cos \frac{\pi}{6} t$	2	30	—	—
6	$0,75t + 1,5t^2$	$150\pi t^2$	$\frac{1}{6}$	25	—	—
7	$0,5t^2$	$20 \cos 2\pi t$	$\frac{3}{8}$	—	40	60
8	$t^3 - 5t$	$6(t + 0,5t^2)$	2	—	—	30
9	$4t + 1,6t^2$	$10 + 10 \sin 2\pi t$	$\frac{1}{8}$	—	—	—
10	$1,2t - t^2$	$2\pi \cos \frac{\pi}{4} t$	$\frac{4}{3}$	20	20	—
11	$2t^2 - 0,5t$	$25 \sin \frac{\pi}{3} t$	4	—	25	—
12	$5t - 4t^2$	$\frac{15}{8} \pi t^3$	2	30	30	—
13	$8t^2 - 3t$	$120\pi t^2$	$\frac{1}{3}$	40	—	—
14	$4t - 2t^2$	$3 + 14 \sin \pi t$	$\frac{2}{3}$	—	—	30
15	$0,2t^3 + t$	$5 \sqrt{2} (t^2 + t)$	2	—	60	45
16	$t - 0,5t^2$	$20 \sin \pi t$	$\frac{1}{3}$	—	20	—
17	$0,5t^2$	$8t^3 + 2t$	1	—	$4 \sqrt{5}$	—
18	$8t - t^2$	$10t + t^3$	2	—	—	60
19	$t + 3t^2$	$6t + 4t^3$	2	40	—	—
20	$6t + t^2$	$30\pi \cos \frac{\pi}{6} t$	3	60	—	—
21	$2t - 4t^2$	$25\pi (t + t^2)$	$\frac{1}{2}$	25	—	—
22	$4t - 0,2t^2$	$10\pi \sin \frac{\pi}{4} t$	$\frac{2}{3}$	30	—	—
23	$2t - 0,25t^2$	$3t^2 + 4t$	2	—	—	30
24	$2t - 0,3t^2$	$75\pi (0,1t + 0,3t^2)$	1	30	—	—
25	$10t - 0,1t^2$	$15 \sin \frac{\pi}{3} t$	5	—	—	—
26	$-2\pi t^2$	$8 \cos \frac{\pi}{2} t$	$\frac{3}{2}$	—	—	45
27	$t - 0,5t^3$	$10 \sqrt{2} \pi \cos 2\pi t$	$\frac{1}{8}$	30	—	—
28	$2t^3 - 5t$	$2,5\pi t^2$	2	40	—	—
29	$0,6t^2$	$6 \sqrt{6} \sin \frac{\pi}{16} t$	4	36	—	30
30	$2t^2 - 3t$	$\frac{5 \sqrt{3}}{3} t^3$	2	20	—	30

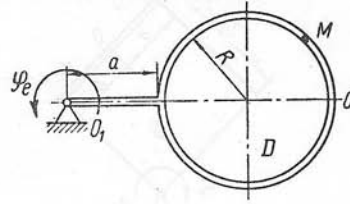
Primjedba: U varijantama 5, 6, 10, 12, 13, 20 do 22, 24, 27, 28 OM je luk kružnice; u svim varijantama položaj tačke M na shemi ima pozitivnu vrijednost s_r ; na shemama 5, 10, 12, 21, 24, 27 OM je luk nad manjim središnjim kutom.



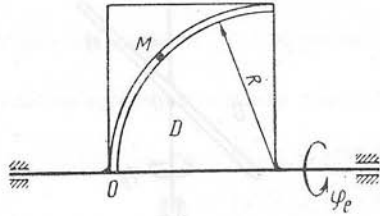
11



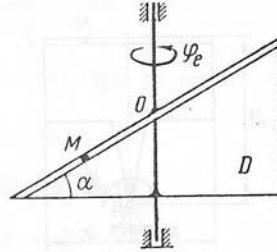
12



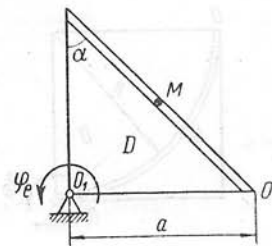
13



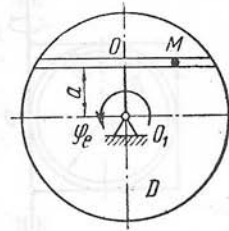
14



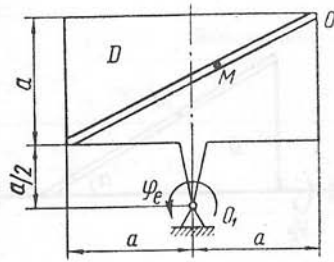
15



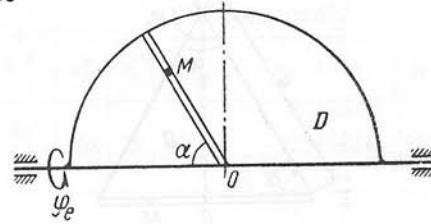
16



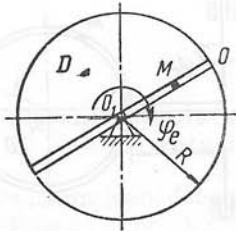
17



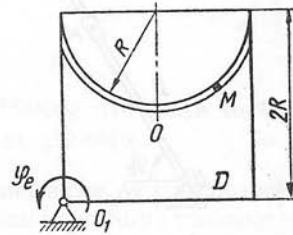
18



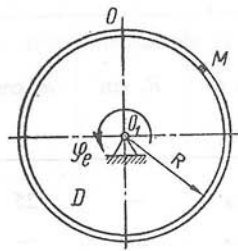
19



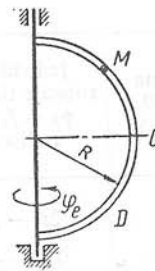
20



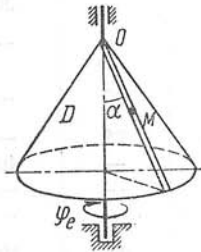
21



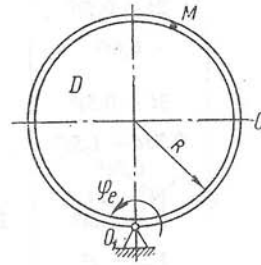
22



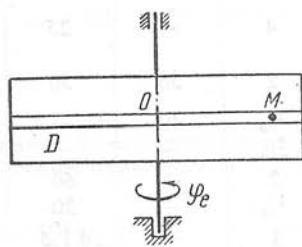
23



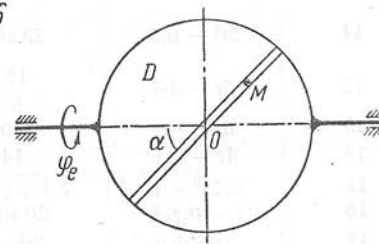
24



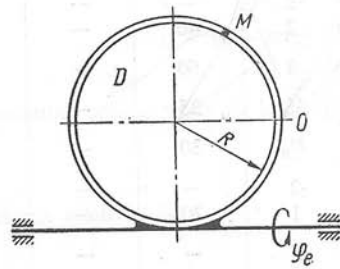
25



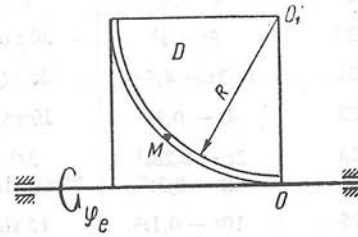
26



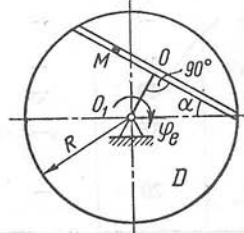
27



28



29



30

